

Document téléchargeable sur le site « Eure en Maths »

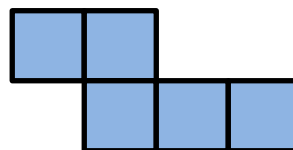
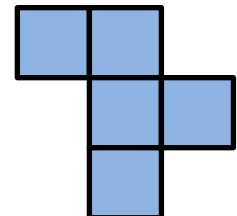
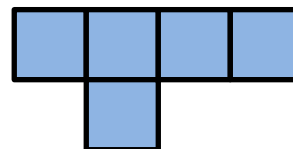
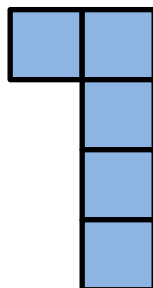
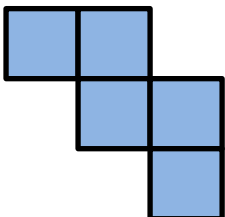
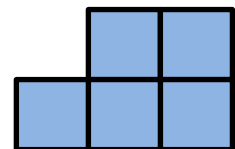
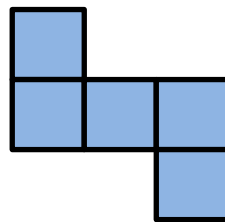
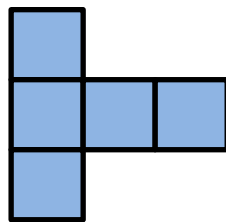
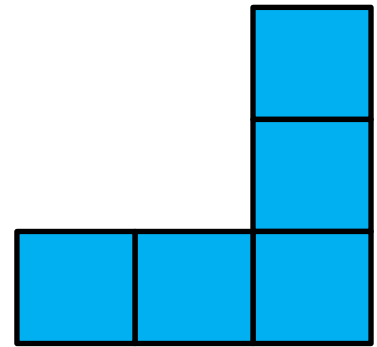


<http://eure-en-maths.spip.ac-rouen.fr/>

Solutions

Problème n°1 – Le gâteau d'anniversaire

Pauline avait 16 ans.

Problème n°2 – Les pentaminos



Document téléchargeable sur le site « Eure en Maths »

<http://eure-en-maths.spip.ac-rouen.fr/>

Solutions

Problème n°3 – Le chat de la mère Michelle

L'échelle d'Alphonse a 27 barreaux.

Problème n°4 – Le gâteau aux pommes



Gâteau de Maxime

8 œufs

375 g de farine

300 g de sucre

3 sachet(s) de levure

375 g de beurre

750 g de pommes